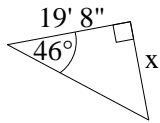
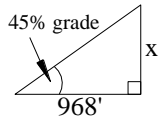


Perform your work **on separate paper** as necessary **and attach it**. Write the appropriate equation for each triangle and answers on this page. Answers must be **boxed or circled** and clearly **legible**. Where possible write answers as an **exact** integer or fraction otherwise use **two** decimal accuracy. Leave π in answers where applicable. **Units** required. 20 pts

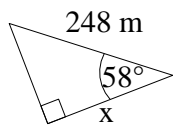
1)



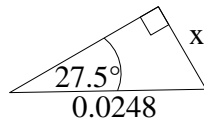
2)



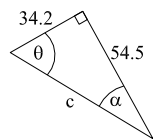
3)



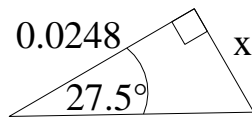
4)



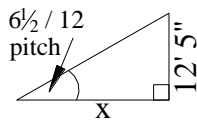
5)



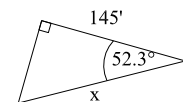
6)



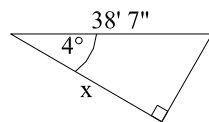
7)



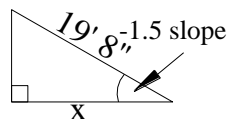
8)



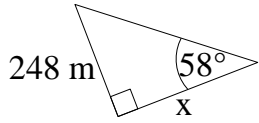
9)



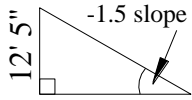
10)



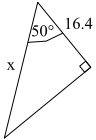
11)



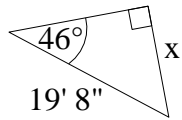
12)



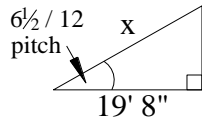
13)



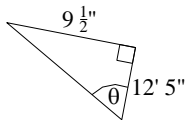
14)



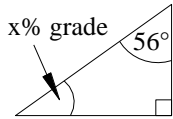
15)



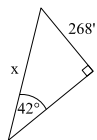
16)



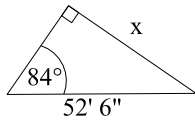
17)



18)



19)



20)

